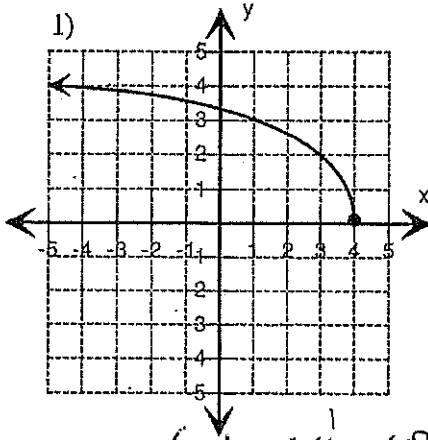
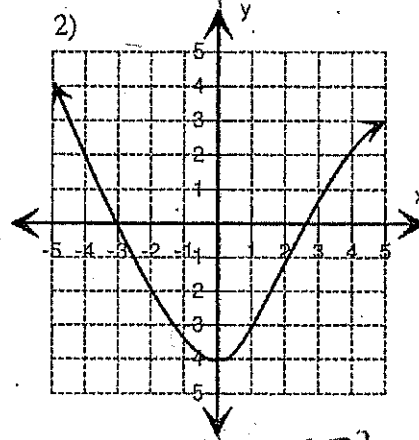


Answer Key

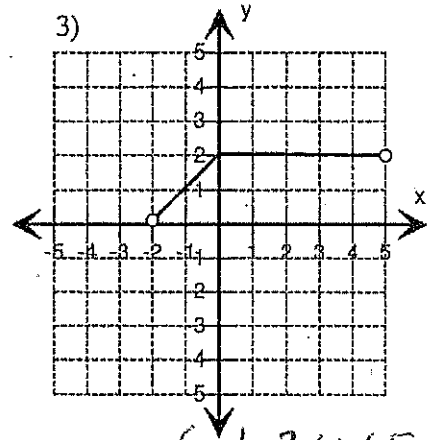
Find the Domain and Range for each graph.



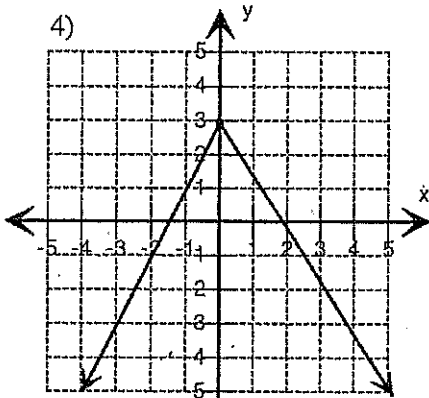
Domain:  $\{x \mid x \leq 4, x \in \mathbb{R}\}$   
 Range:  $\{y \mid y \geq 0, y \in \mathbb{R}\}$



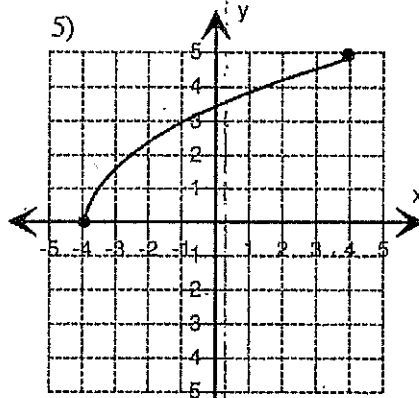
Domain:  $\{x \mid x \in \mathbb{R}\}$   
 Range:  $\{y \mid y \geq -4, y \in \mathbb{R}\}$



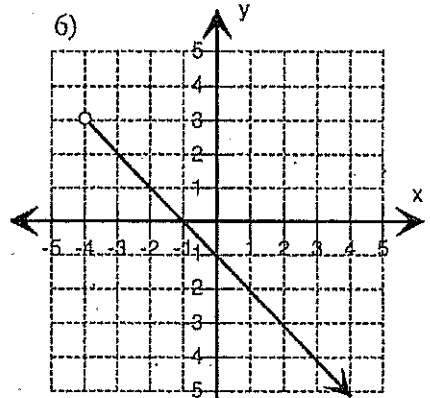
Domain:  $\{x \mid -2 < x < 5, x \in \mathbb{R}\}$   
 Range:  $\{y \mid 0 < y \leq 2, y \in \mathbb{R}\}$



Domain:  $\{x \mid x \in \mathbb{R}\}$   
 Range:  $\{y \mid y \leq 3, y \in \mathbb{R}\}$

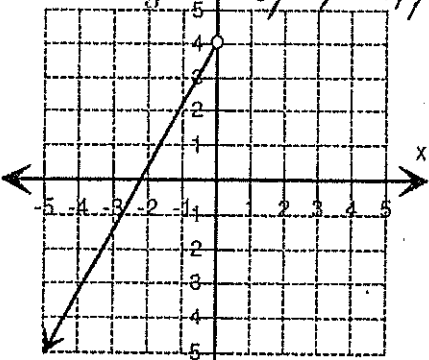


Domain:  $\{x \mid -4 \leq x \leq 4, x \in \mathbb{R}\}$   
 Range:  $\{y \mid 0 \leq y \leq 5, y \in \mathbb{R}\}$



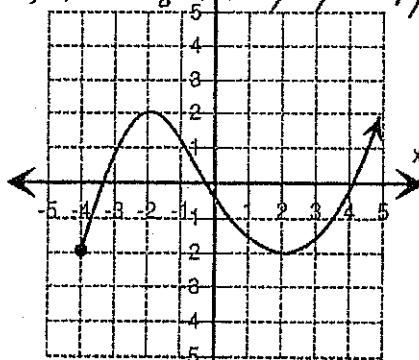
Domain:  $\{x \mid x > -4, x \in \mathbb{R}\}$   
 Range:  $\{y \mid y < 3, y \in \mathbb{R}\}$

7) Range:  $\{y \mid y < 4, y \in \mathbb{R}\}$



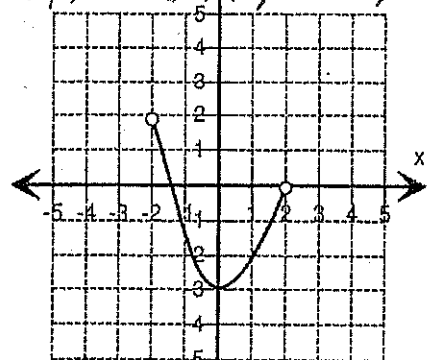
Domain:  $\{x \mid x < 0, x \in \mathbb{R}\}$

8) Range:  $\{y \mid y \geq -2, y \in \mathbb{R}\}$



Domain:  $\{x \mid x \geq -4, x \in \mathbb{R}\}$

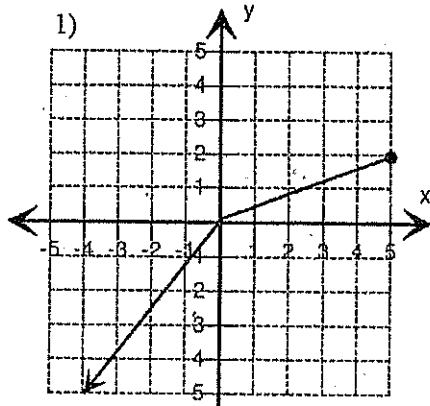
9) Range:  $\{y \mid -3 \leq y < 2, y \in \mathbb{R}\}$



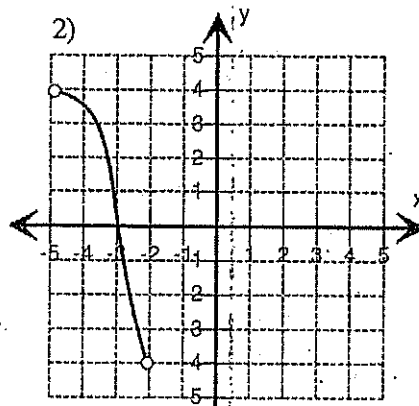
Domain:  $\{x \mid -2 < x < 2, x \in \mathbb{R}\}$

Answer Key

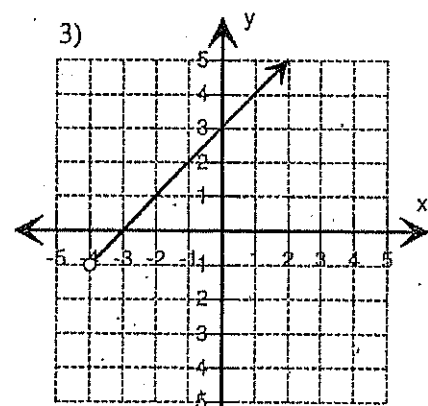
Find the Domain and Range for each graph.



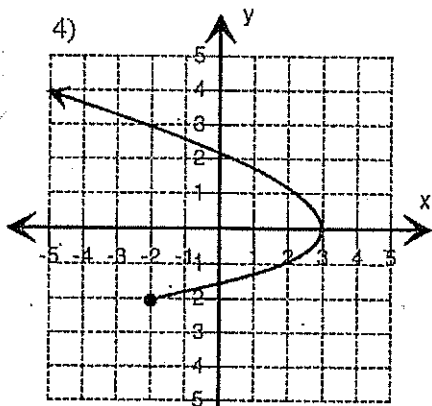
Domain:  $\{x \mid x \leq 5, x \in \mathbb{R}\}$   
 Range:  $\{y \mid y \leq 2, y \in \mathbb{R}\}$



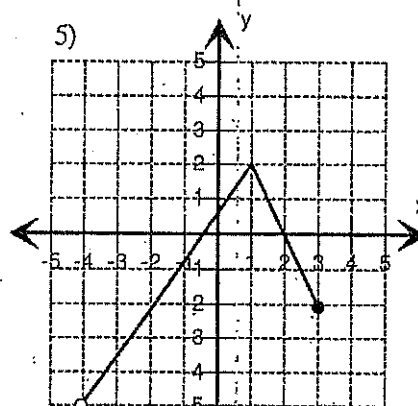
Domain:  $\{x \mid -5 < x < -2, x \in \mathbb{R}\}$   
 Range:  $\{y \mid -4 < y < 4, y \in \mathbb{R}\}$



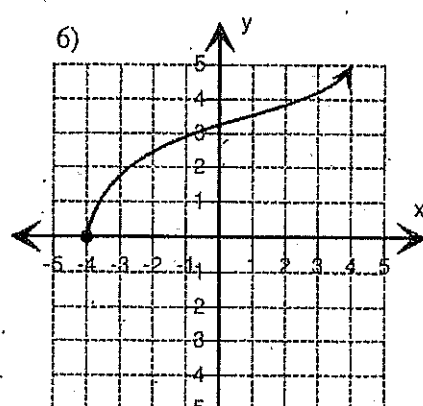
Domain:  $\{x \mid x > -4, x \in \mathbb{R}\}$   
 Range:  $\{y \mid y > -1, y \in \mathbb{R}\}$



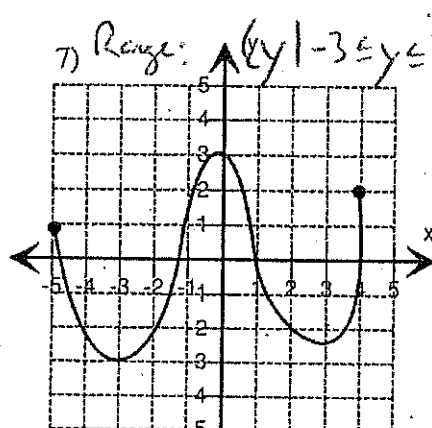
Domain:  $\{x \mid x \leq 3, x \in \mathbb{R}\}$   
 Range:  $\{y \mid y \geq -2, y \in \mathbb{R}\}$



Domain:  $\{x \mid -4 < x \leq 3, x \in \mathbb{R}\}$   
 Range:  $\{y \mid -5 < y \leq 2, y \in \mathbb{R}\}$

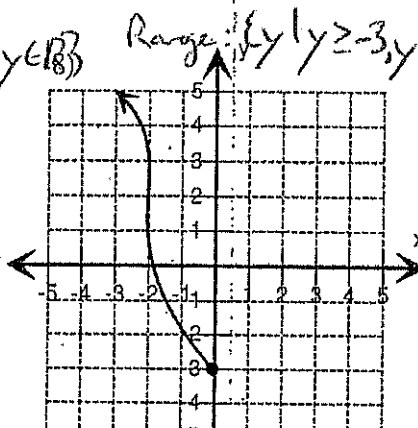


Domain:  $\{x \mid x \geq -4, x \in \mathbb{R}\}$   
 Range:  $\{y \mid y \geq 0, y \in \mathbb{R}\}$



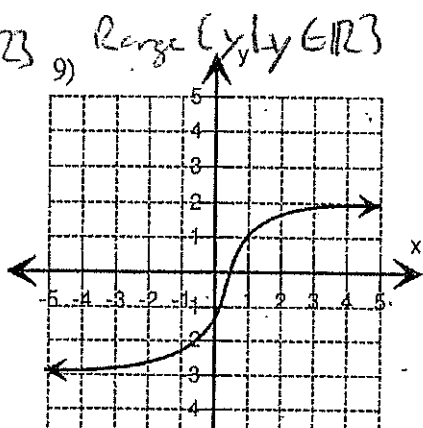
Range:  $\{y \mid -3 \leq y \leq 3, y \in \mathbb{R}\}$

Domain:  $\{x \mid -5 \leq x \leq 4, x \in \mathbb{R}\}$



Range:  $\{y \mid y \geq -3, y \in \mathbb{R}\}$

Domain:  $\{x \mid x \leq 0, x \in \mathbb{R}\}$



Range:  $\{y \mid y \in \mathbb{R}\}$

Domain:  $\{x \mid x \in \mathbb{R}\}$